
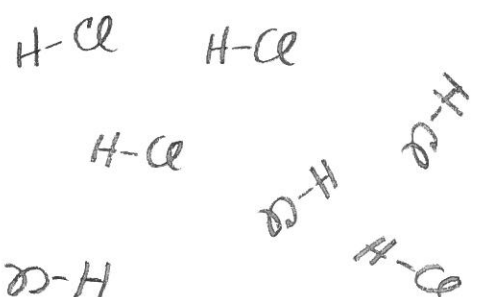
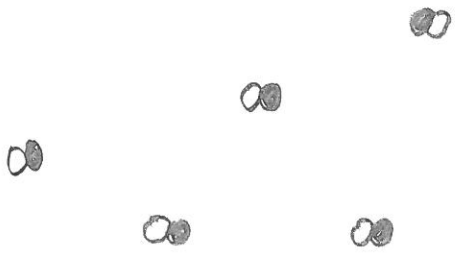

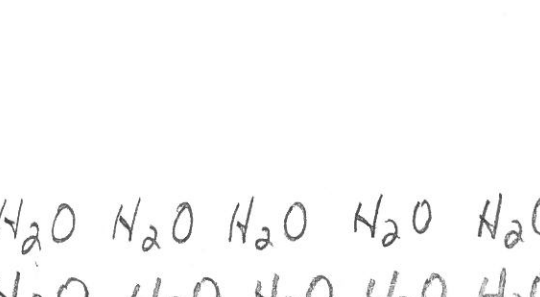
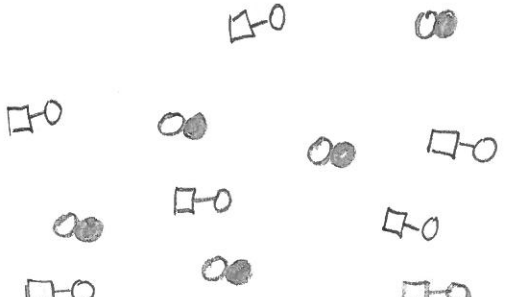



Classify the following as atoms or molecules, elements or compounds, homogeneous or heterogeneous mixtures:

<p>1</p> 	<p>2</p> 
<p>3</p> 	<p>4</p> 
<p>5</p>  <p><math>H_2O</math> <math>H_2O</math> <math>H_2O</math> <math>H_2O</math> <math>H_2O</math>  <math>H_2O</math> <math>H_2O</math> <math>H_2O</math> <math>H_2O</math> <math>H_2O</math></p>	<p>6</p> 
<p>7</p> 	<p>8</p> 